






Reasoning 1


a)

Dillan and Amy make a tally chart of the insects they found in the garden.


Insects in the garden	Tally
	
	
	
	

Tick one box below that shows all the insects Dillan and Amy saw and explain why the others are incorrect.













b))

Thomas and Sarah make a tally chart of the toys they found in their class toy box.

Toys found in the toy box	Tally
	
	
	
	

Tick one box below that shows all the toys Thomas and Sarah saw and explain why the others are incorrect.

