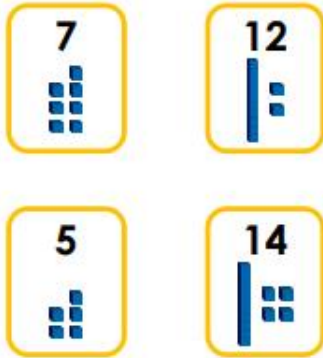


Subtraction Crossing 10 2

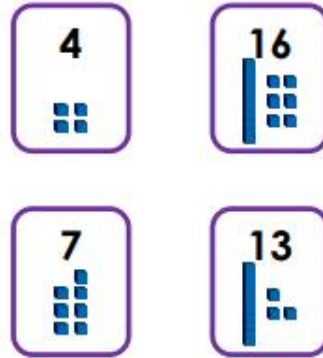
Subtraction Crossing 10 2

1a. Match the pairs of cards that have a difference of 7.



PS

1b. Match the pairs of cards that have a difference of 9.



PS

2a. Kim has 15 pencils. She gives 6 to Theo.



Kim says,



The difference between the two numbers is 9.

Do you agree? Explain your answer.



R

2b. Joe has 16 raisins. He gives 9 to Gemma.



Joe says,



The difference between the two numbers is 8.

Do you agree? Explain your answer.

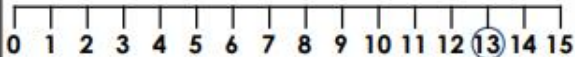


R

3a. There are 13 daisies in a garden.



Some flowers are picked. Now there are less than 10 left.



How many daisies might have been picked? Give 3 examples.

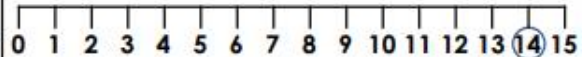


PS

3b. There are 14 frogs in a pond.



Some jump away. Now there are less than 10 left.



How many frogs might have jumped away? Give 3 examples.



PS