

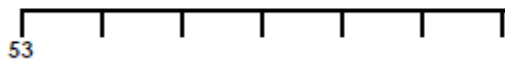
Add 2-Digit and 1-Digit Numbers

1a. Use the clues to solve the calculation. How many calculations can you create?



I am adding a 1-digit number. It is greater than 5 but less than 8.

$$53 + \square = \square$$



PS

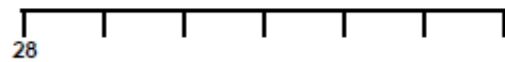
Add 2-Digit and 1-Digit Numbers

1b. Use the clues to solve the calculation. How many calculations can you create?



I am adding a 1-digit number. It is greater than 6 but less than 9.

$$28 + \square = \square$$



PS

2a. Steve completes a calculation using Base 10.

$$25 + 7 = 32$$



Is he correct? Explain how you know.



R

2b. Kobi completes a calculation using Base 10.

$$41 + 8 = 48$$



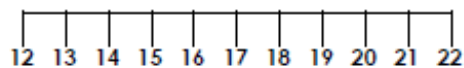
Is he correct? Explain how you know.



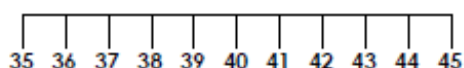
R

3a. Check the calculations using the number lines. Find and correct any errors.

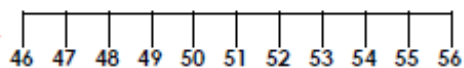
A. $5 + 12 = 17$



B. $8 + 35 = 43$



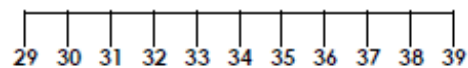
C. $46 + 3 = 48$



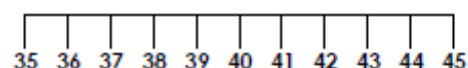
PS

3b. Check the calculations using the number lines. Find and correct any errors.

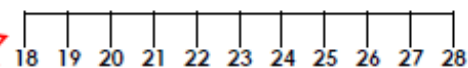
A. $29 + 5 = 35$



B. $4 + 35 = 39$



C. $18 + 1 = 19$



PS