







# Year 2 Statistics - Task 2: PICTOGRAMS

Look carefully at the Pictograms below and answer the questions.

Key:  = 1

Day	Number of apples sold
Monday	
Tuesday	
Wednesday	
Thursday	
Friday	
Saturday	
Sunday	


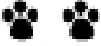

Five apples were sold on Sunday. Complete the Pictogram to show this.

How many apples were sold on Friday? \_\_\_\_\_

What was the total amount of apples sold on Monday and Tuesday? \_\_\_\_\_

The shop sold the most apples on \_\_\_\_\_.

The least amount of apples were sold on \_\_\_\_\_.

Favorite Pets	
Cat	
Dog	
Hamster	



Each  stands for 2 votes.

Which pet got the most votes? \_\_\_\_\_

Which pet got the smallest amount of votes? \_\_\_\_\_

How many people chose cats as their favourite pet? \_\_\_\_\_

\_\_\_\_\_ people voted for Hamsters.

## Year 2 Statistics - Task 2: PICTOGRAMS

Create a Pictogram using the Tally chart below.

Easter Eggs eaten	Tally	Total
Monday	<del>    </del>	7
Tuesday	<del>    </del> <del>    </del>	10
Wednesday	<del>    </del>	5
Thursday		3
Friday		4

Pictogram:

Day	Easter Eggs Eaten
Monday	
Tuesday	
Wednesday	
Thursday	
Friday	

Key:  = 1

What was the total amount of Easter Eggs eaten on Monday, Tuesday and Thursday?

Number Sentence: \_\_\_\_\_ + \_\_\_\_\_ + \_\_\_\_\_ = \_\_\_\_\_